
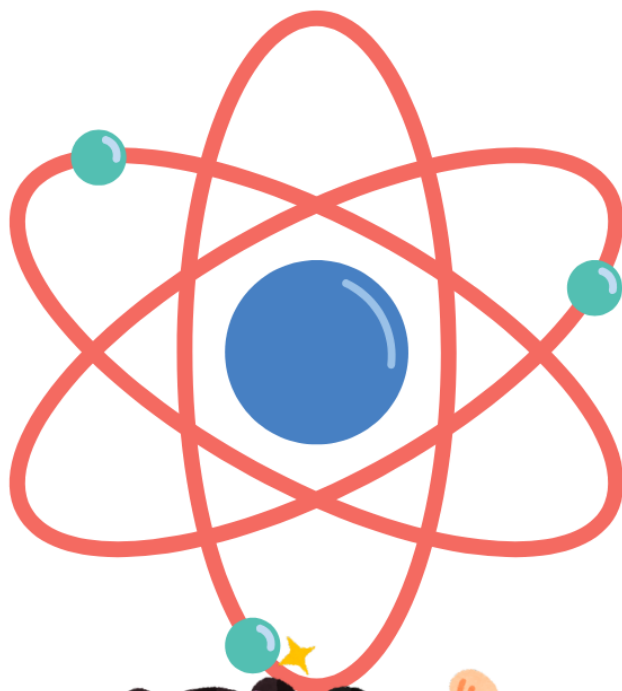




Einstein
PUBLIC SCHOOL

Nurturing a better tomorrow

Holiday Homework Class 1



Hindi

1. लेखन के लिए एक अनुच्छेद:

- मेरा नाम अमन है। मैं घर के पास बगीचे में गया। वहाँ कमल का फूल खिला था। किताब में चित्र देखे। दीप जलाकर रोशनी की। सुबह सूरज निकला। मोर पंख फैलाकर नाचा। मेला देखने गया। वहाँ सैनिक भी आए। ऋषि मुनि भी आए।

'अ' से 'ऋ' तक की मात्रा का अभ्यास:

2. मात्रा के अनुसार दो - दो शब्द लिखो:

- अ →
- आ →
- इ →
- ई →
- उ →
- ऊ →
- ऋ →

3. सही मात्रा लगाओ:

- क + ल =
- सै + न + क =
- ग + ह =
- क + षि =
- हा + थ =

4. खाली जगह भरो:

- - जंगल में _____ रहते हैं। → ऋषि
- - अब गर्मी की _____ है। → ऋतु
- - देश की रक्षा _____ करते हैं। → सैनिक
- - मेरा _____ साफ है। → गृह



5. वाक्य बनाओ:

- - गृह--
- - इमली--
- - फूल--
- - आम--
- - चीनी--
- - कुछ --

6. ऋ की मात्रा वाले शब्दों पर गोला लगाओ:

- राम, ऋषि, कृषि, गृह, पानी, सैनिक, घर, ऋतु

7. निम्न में से किसी एक पर रंगों से भरा A4 सीट पर चार्ट बनाइए।

- क) वर्णमाला
ख) स्वर वर्ण
ग) व्यंजन वर्ण

नोट: रोज़ 30 मिनट पढ़ाई करो। काम साफ़-सुथरा और सुंदर लिखावट में करो।
माता-पिता से जाँच करवाकर हस्ताक्षर करवाएँ।

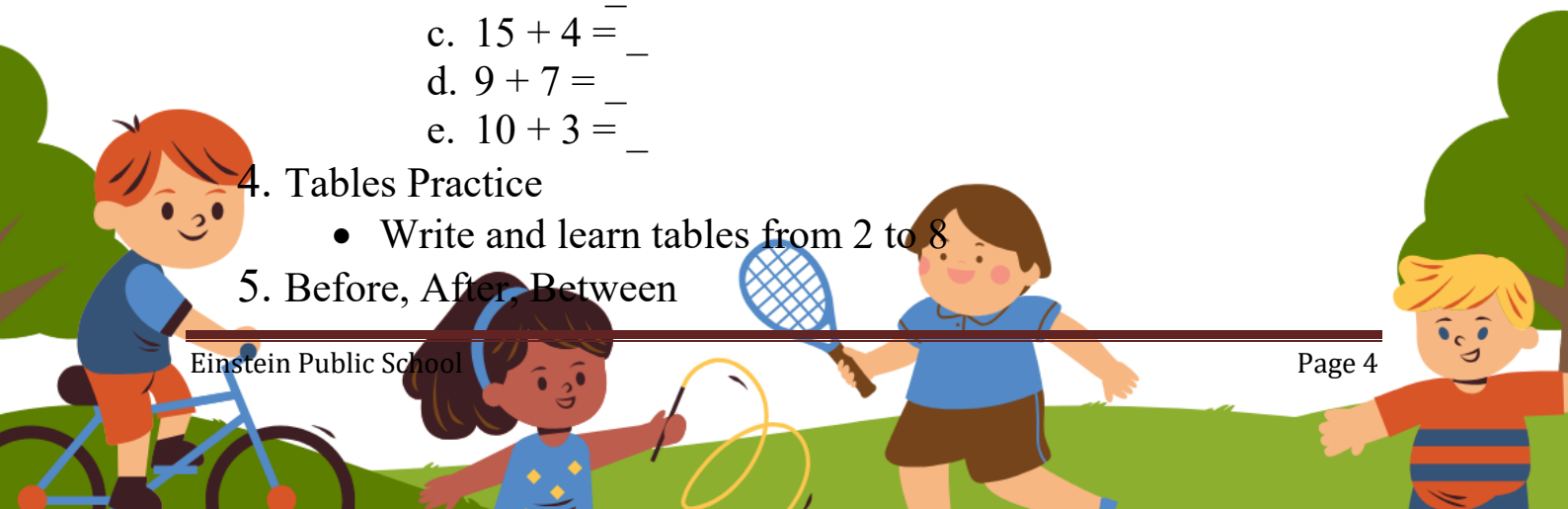


English

1. Paragraph Writing Write 3–4 lines on: “My Favourite Toy” .
 - Draw and color a picture related to it.
2. Sentence Transformation (Basic) Change 10 sentences:
 - Positive → Negative (e.g., I am happy → I am not happy)
3. Word Tree Activity
 - Write one word (e.g., Good / अच्छा)
 - Write 3 similar words and decorate like a tree.
4. Picture Description
 - Paste any picture and write 2–3 lines about it

Maths

1. Number Writing
 - Write numbers from 1 to 100
2. Number Names
 - Write number names from 1 to 20
3. Addition
 - Solve the following (5 sums):
 - a. $12 + 5 = \underline{\quad}$
 - b. $8 + 6 = \underline{\quad}$
 - c. $15 + 4 = \underline{\quad}$
 - d. $9 + 7 = \underline{\quad}$
 - e. $10 + 3 = \underline{\quad}$
4. Tables Practice
 - Write and learn tables from 2 to 8
5. Before, After, Between



- Fill in the blanks:

- _, 10, _
- _, 25, _
- 14, _, 16
- 19, _, 21
- _, 30, _

6. Ascending & Descending Order

- Arrange in ascending order: 5, 2, 9, 1
- Arrange in descending order: 3, 8, 4, 7

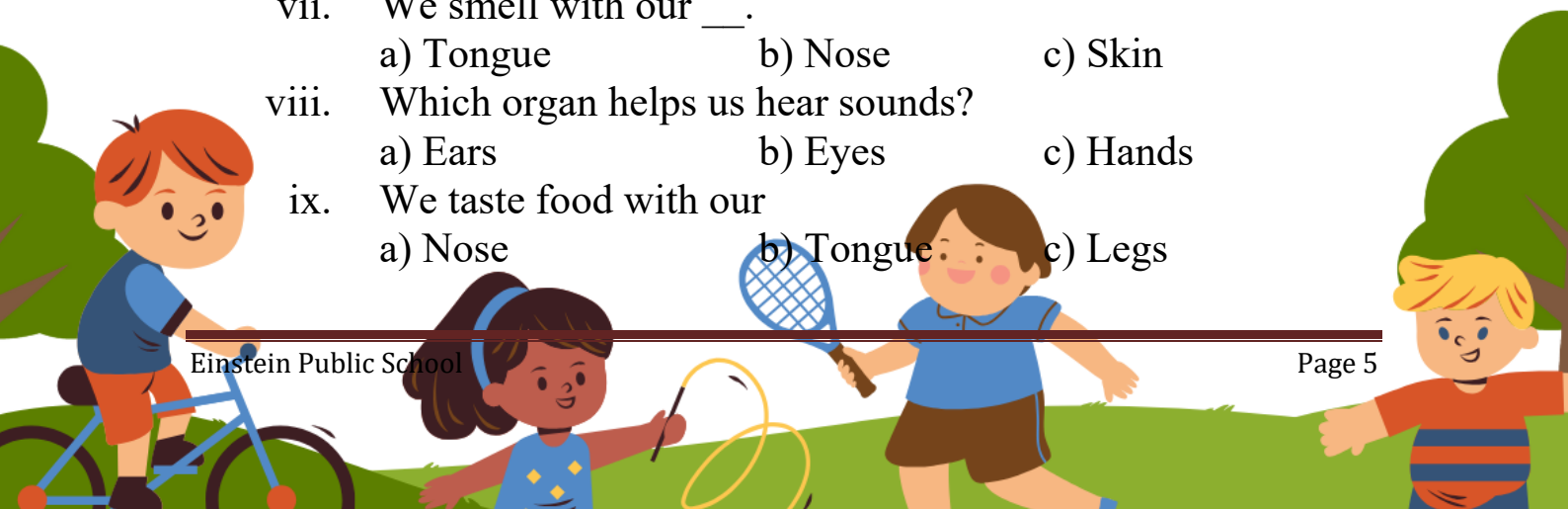
7. Project Work (Mandatory)

- Make a colourful Number Chart (1–50) on an A4 sheet
Decorate neatly and paste it in a file

EVs

1. Multiple Choice Questions (MCQs)

- Which body part helps us see?
a) Nose b) Eyes c) Ears
- We hear with our ____.
a) Hands b) Legs c) Ears
- Which body part helps us smell?
a) Nose b) Tongue c) Eyes
- We walk with our ____.
a) Hands b) Legs c) Eyes
- Which body part helps us taste food?
a) Tongue b) Nose c) Skin
- Which body part helps us see?
a) Nose b) Eyes c) Ears
- We smell with our ____.
a) Tongue b) Nose c) Skin
- Which organ helps us hear sounds?
a) Ears b) Eyes c) Hands
- We taste food with our
a) Nose b) Tongue c) Legs



- x. Which sense organ helps us feel hot and cold?
a) Skin b) Eyes c) Ears
- xi. We should wear a ___ while riding a bicycle.
a) Cap b) Helmet c) Shoes
- xii. Which of these is safe?
a) Playing with knives b) Running on stairs
c) Following safety rules
- xiii. What should we do before crossing the road?
a) Run fast b) Look both sides c) Close eyes
- xiv. Which thing can give us an electric shock?
a) Ball b) Wet switch c) Book
- xv. We should keep our classroom _____.
a) Dirty b) Noisy c) Clean
- xvi. Which light means “Go”?
a) Red b) Green c) Yellow
- xvii. We should not play on the _____.
a) Playground b) Footpath c) Road
- xviii. What should we use while going upstairs?
a) Lift carefully b) Railing c) jump
- xix. We should keep sharp objects _____ from children.
a) Near b) Away c) Open
- xx. Safety rules protect us from _____.
a) Games b) Accidents c) Books

2. True or False

- a. Eyes help us see.
b. We hear with our tongue.
c. Skin helps us feel things.
d. Nose helps us smell.
e. Ears help us taste food.
f. We should wear a helmet while riding a bicycle.
g. We should run across the road.
h. We should use the zebra crossing to cross the road.
i. It is safe to touch switches with we hands.
j. We should keep sharp objects away from children.

3. Match the Following

Column A

1. Eyes
2. Ears
3. Nose
4. Tongue
5. Skin
6. Helmet
7. Red light
8. Footpath
9. Zebra crossing
10. Wet hands on switch

Column B

- a. Smell
- b. Taste
- c. See
- d. Hear
- e. Feel
- f. Stop
- g. Walk safely
- h. Protects head
- i. Electric shock
- j. Cross road

4. One Word Answers

1. Which organ helps us see?
2. Which organ helps us hear?
3. Which organ helps us smell?
4. Which organ helps us taste?
5. Which organ helps us feel?
6. What protects our head while riding a bicycle?
7. Which light tells us to stop?
8. Where should we walk on the road?
9. Where should we cross the road?
10. What can wet hands on a switch cause?



