
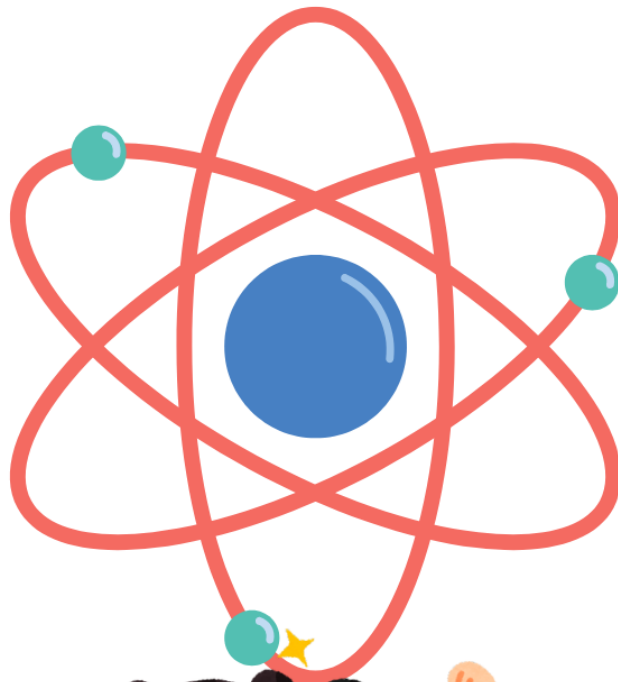





Einstein
PUBLIC SCHOOL

Nurturing a better tomorrow

Holiday Homework Class 3



Hindi

सामान्य निर्देश:

- परियोजना कार्य अनिवार्य है।
- कार्य रचनात्मक होना चाहिए।
- इसे वर्कशीट/स्क्रेपबुक/फाइल के रूप में तैयार करें।

हिंदी परियोजना कार्य (कक्षा 3)

विषय: मेरा प्रिय फल

निर्देश:

- अपने पसंदीदा फल का नाम लिखें।
- उसके बारे में 5-6 सरल वाक्य लिखें।
- उस फल का सुंदर चित्र बनाकर रंग भरें।

विषय: मेरा परिवार

निर्देश:

- अपने परिवार के सदस्यों के नाम लिखें।
- प्रत्येक सदस्य के बारे में 1-2 वाक्य लिखें।
- परिवार का चित्र बनाएं या फोटो चिपकाएं।

विषय: वर्णमाला अभ्यास

निर्देश:

- अ से ज तक लिखें।



- प्रत्येक अक्षर से एक शब्द और उसका चित्र बनाएं।

विषय: छोटी कहानी लेखन

निर्देश:

- कोई भी छोटी कहानी लिखें (5-6 वाक्य)।
- कहानी से संबंधित चित्र बनाएं।
- अच्छा शिष्टाचार गुड मेनर पर 10 लाइन लिखिए।

एक्टिविटी-छत या गार्डन में चिड़ियों के लिए दान और पानी रखिए।

दाना चुगते हुए चिड़ियों का वीडियो बनाकर क्लास टीचर के पास भेजें।

प्रस्तुति निर्देश:

- साफ-सुथरा और सुंदर कार्य करें।
- नाम, कक्षा, सेक्शन स्पष्ट रूप से लिखें।
- रंगों और चित्रों का प्रयोग करें।



English

1. Project Title: The Noun & Gender Tree

- Materials Needed:

- ✓ 1 Chart Paper (White or light yellow)
- ✓ Colored sheets (Green, Brown, Pink, Blue)
- ✓ Sketch pens, scissors, and glue

2. Activity 1: Noun & Gender Tree

- Draw a big tree on chart paper. Make leaves with masculine and feminine noun pairs.
- Example: King–Queen, Lion–Lioness, Boy–Girl, Father–Mother.
- Paste green leaves on one side for Masculine and pink leaves on the other for Feminine.

3. Activity 2: Transformation of Sentences

A. Change into Negative - Add 'not'

1. I am happy. → _____
2. She is my mother. → _____
3. This is a big ball. → _____
4. We are in the garden. → _____
5. Dogs can swim. → _____

B. Change into Questions - Start with Is/Are/Can

6. You are a good boy. → _____
7. That is my school bag. → _____
8. Cats can climb trees. → _____
9. They are my friends. → _____
10. It is a sunny day. → _____

C. Change into Plural

11. This is a flower. → _____
12. The baby is sleeping. → _____
13. I have one pencil. → _____
14. A bird is on the tree. → _____



15. That is a red apple. → _____
4. Activity 3: Paragraph Writing
Write 5-6 lines on any one topic. Use neat handwriting.
Choose from:

a. My School Garden

Hints: flowers, trees, colors, birds, how you feel

b. My Favourite Toy

Hints: name, color, who gave it, why you like it, how you play

Maths

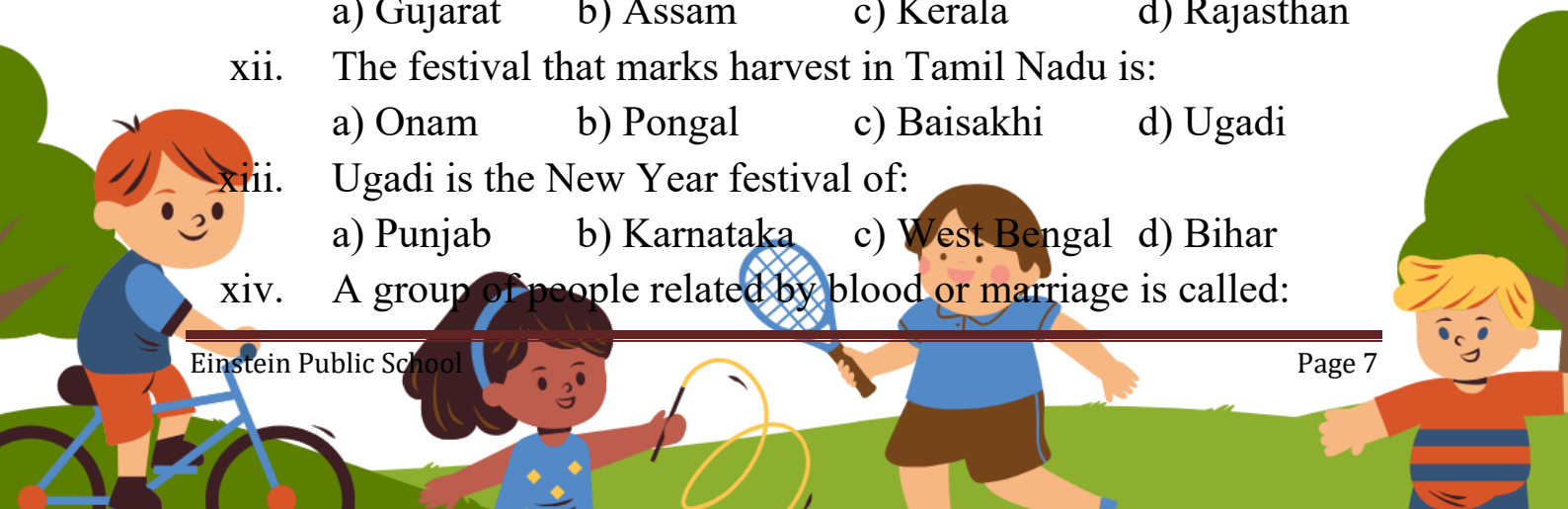
- Write the number names for the following:
(a) 4083 (b) 7458 (c) 2435 (d) 7825
- Write the numerals for the following:
(a) Eight thousand two hundred thirty six
(b) Seven thousand nine hundred thirty five
(c) Five hundred three
(d) Seven thousand seven hundred six
- Draw the correct number of beads on the abacus according to the number given below:
(a) 6034 (b) 3463
- Write the place value and face value of the underlined digits:
(a) 1987 (b) 3210
- Write the predecessor of each of the following numbers:
(a) 3750 (b) 1295
- Write the successor of each of the following numbers:
(a) 1789 (b) 2678
- Write the expanded form of the following:
(a) 6785 (b) 2934

8. Write short form of the following:
 - (a) $6000 + 200 + 90 + 1$
 - (b) $8000 + 600 + 8$
9. Put the correct symbol $>$, $<$ or $=$:
 - (a) $6013 _ 6013$
 - (b) $9857 _ 9850$
 - (c) $953 _ 1809$
 - (d) $3245 _ 8654$
10. Arrange the following numbers in ascending order:
 - (a) 1389, 6521, 1730, 2163
 - (b) 4181, 7611, 7185, 9356
11. Arrange the following numbers in descending order:
 - (a) 3124, 2189, 5630, 2763
 - (b) 4463, 8398, 3481, 3536
12. Form the biggest and smallest 4-digit numbers with the given digits:
 - (a) 1, 5, 7, 9
 - (b) 0, 4, 5, 6
13. Separate the even numbers and odd numbers:
2631, 5084, 5999, 2729, 6827, 3494, 4612, 9255, 8791, 2436
14. Round the following to the nearest hundred:
(a) 2456 (b) 8259 (c) 4150 (d) 3486
15. Write tables from 2 to 20 by multiple method.
16. Write Roman numerals 1 to 50 in a chart OR make a clock by matchsticks and thermocol.

EVs

1. Choose the correct options.

- i. Which plant has a thick and woody stem?
a) Herb b) Shrub c) Tree d) Climber
- ii. Banana and Mint are examples of:
a) Trees b) Herbs c) Shrubs d) Creepers
- iii. A plant with a weak stem that grows along the ground is called:
a) Tree b) Climber c) Creeper d) Shrub
- iv. Rose and Hibiscus are examples of:
a) Herbs b) Shrubs c) Trees d) Climbers
- v. Which part of the plant makes food?
a) Root b) Stem c) Leaf d) Flower
- vi. Watermelon is a:
a) Tree b) Shrub c) Climber d) Creeper
- vii. Which of these is NOT a use of plants?
a) Give us oxygen b) Give us plastic
c) Give us food d) Give us wood
- viii. Holi is called the festival of:
a) Lights b) Colours c) Kites d) Brothers
- ix. Which spring festival is celebrated mainly in Punjab?
a) Bihu b) Baisakhi c) Ugadi d) Pongal
- x. In which month is Holi usually celebrated?
a) January b) March c) August d) November
- xi. Bihu is the spring festival of which state?
a) Gujarat b) Assam c) Kerala d) Rajasthan
- xii. The festival that marks harvest in Tamil Nadu is:
a) Onam b) Pongal c) Baisakhi d) Ugadi
- xiii. Ugadi is the New Year festival of:
a) Punjab b) Karnataka c) West Bengal d) Bihar
- xiv. A group of people related by blood or marriage is called:



- a) School b) Family c) Team d) Club
- xv. A family with parents and their children is called:
a) Joint family b) Nuclear family
c) Big family d) Small family
- xvi. Your father's father is your:
a) Uncle b) Grandfather c) Cousin d) Nephew
- xvii. In a joint family, who lives together?
a) Only parents and children
b) Parents, children, grandparents, uncles, aunts
c) Only friends
d) Only cousins
- xviii. A good friend is someone who:
a) Fights with you b) Helps you
c) Teases you d) Takes your things
- xix. Your mother's sister is your:
a) Maternal aunt b) Niece
c) Grandmother d) Sister-in-law
- xx. Families celebrate festivals together to:
a) Fight b) Share happiness
c) Study d) Sleep
2. Write 10 sentences about your favourite spring festival celebrated in India.
3. Write 4-4 examples of-
Tree Shrub Herb Climber Creeper
4. Case based questions –

A. Story:

In March, Rohan's school had a holiday. All the children came in yellow clothes. They prayed and ate yellow rice. After 1 month, there was another holiday. Everyone threw colours and ate sweets.

Questions:

1. Name the first festival.
2. What did the children eat after prayer?



3. What do we play with on Holi?

B. Story:

Arjun lives with his mummy, papa, and little sister. On Sunday his grandfather also came to meet them. Arjun fell while playing. His sister gave him water and his friend Aman gave him a band-aid.

Questions:

1. Is Arjun's family a joint family or nuclear family?
2. Who came to meet with Arjun's family on Sunday?
3. Who helped Arjun when he fell? Name any one.
5. Make "Family Tree" on a chart paper. (With photographs of your family members)
6. Make a small calendar for the month of March, April and May on A4 size sheet and show all holidays on it.
7. Go to your garden or a nearby park. Collect some fallen leaves of different shapes and sizes. Now , paste them to make beautiful pictures of animals on A4 size sheets. Like this.

